


# GCSE Mathematics Specification (8300/1F)

Paper 1 Foundation tier

# F

Date Morning 1 hour 30 minutes

### Materials

<p><b>For this paper you must have:</b></p> <ul style="list-style-type: none"> <li>mathematical instruments</li> </ul> <p>You must <b>not</b> use a calculator</p>	
--	--

### Instructions

- Use black ink or black ball-point pen. Draw diagrams in pencil.
- Fill in the boxes at the bottom of this page.
- Answer **all** questions.
- You must answer the questions in the spaces provided. Do not write outside the box around each page or on blank pages.
- Do all rough work in this book.
- In all calculations, show clearly how you work out your answer.

### Information

- The marks for questions are shown in brackets.
- The maximum mark for this paper is 80.
- You may ask for more answer paper, graph paper and tracing paper. These must be tagged securely to this answer book.

Please write clearly, in block capitals, to allow character computer recognition.

Centre number  Candidate number

Surname

Forename(s)

Candidate signature \_\_\_\_\_

Answer **all** questions in the spaces provided.

- 1 How many centimetres are there in 3.7 metres?  
Circle your answer.

[1 mark]

0.037

0.37

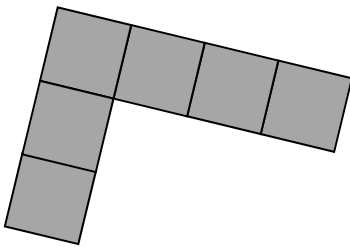
37

370

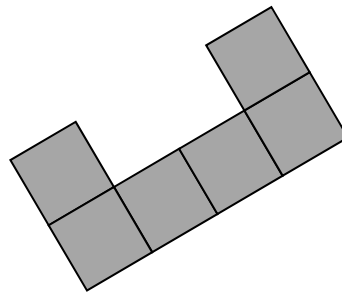
- 2 Which of these is the **net** of a **cube**?  
Circle the correct letter.

[1 mark]

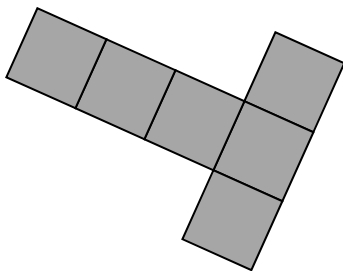
A



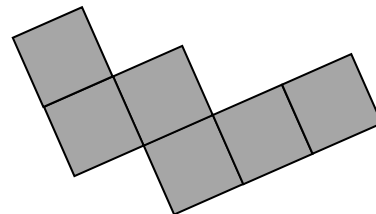
B



C



D



3 Circle the fraction that is **not** equivalent to  $\frac{3}{8}$

[1 mark]

$$\frac{6}{16}$$

$$\frac{9}{24}$$

$$\frac{12}{32}$$

$$\frac{15}{35}$$

4 Simplify  $5a - (2a + 6)$

Circle your answer.

[1 mark]

$$3a + 6$$

$$9a$$

$$-3a$$

$$3a - 6$$

**Turn over for the next question**

5 Complete the table.

[2 marks]

Minutes	Hours
30	$\frac{1}{2}$
40	
	$2\frac{1}{4}$

6 Here are some numbers.

9.6

12.6

15.4

7.6

12.4

17.4

Write the numbers in pairs so that the **sum** of the numbers in each pair is the same.

[2 marks]

---



---



---



---



---



---



---



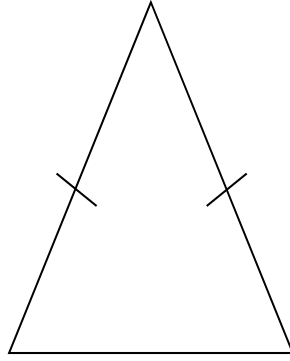
---

Answer \_\_\_\_\_ and \_\_\_\_\_

\_\_\_\_\_ and \_\_\_\_\_

\_\_\_\_\_ and \_\_\_\_\_

7 This triangle is drawn accurately.



What type of triangle is it?

Tick **two** boxes.

[1 mark]

acute-angled

obtuse-angled

equilateral

isosceles

scalene

Turn over for the next question

**8** Work out 51% of 400

**[2 marks]**

---

---

---

---

---

Answer \_\_\_\_\_

**9** Write 180 g as a fraction of 3 kg  
Give your answer in its simplest form.

**[2 marks]**

---

---

---

---

Answer \_\_\_\_\_

**10** Here are some properties of numbers.

- A Even
- B Odd
- C Prime
- D Square
- E Two-digit

**10 (a)** Which **two** properties does the number 4 have?

Circle the correct letters.

[1 mark]

A                      B                      C                      D                      E

**10 (b)** Can one number have **all** of the properties?

Tick a box.

Yes

No

Cannot tell

Give a reason for your answer.

[1 mark]

---



---

**10 (c)** Write down a number with **three** of the properties.

State which properties it has.

[2 marks]

---



---



---

Number \_\_\_\_\_

Properties \_\_\_\_\_, \_\_\_\_\_, \_\_\_\_\_

Turn over ►

- 11** Ranjit has six coins in his pocket.  
If he picks **five** of the coins  
the most he could pick is £4.60  
the least he could pick is £2.70  
How much money does he have altogether?

**[4 marks]**

---

---

---

---

---

---

---

---

---

---

Answer £ \_\_\_\_\_



12 Here are three expressions.

$$\frac{b}{a}$$

$$a - b$$

$$ab$$

When  $a = 2$  and  $b = -6$  which expression has the smallest value?

You **must** show your working.

[2 marks]

---

---

---

---

Answer \_\_\_\_\_

**Turn over for the next question**

- 13** The table shows the ratio of teachers to children needed for two activities.

	teachers : children
Climbing	1 : 4
Walking	1 : 9

- 13 (a)** There are 7 teachers to take children climbing.

What is the greatest number of children that can go climbing?

**[1 mark]**

---

Answer \_\_\_\_\_

- 13 (b)** 49 children want to go walking.

What is the smallest number of teachers needed?

**[1 mark]**

---

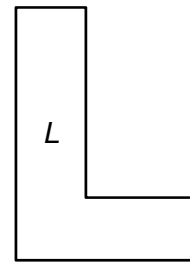
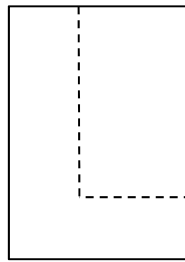
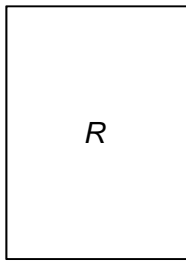
Answer \_\_\_\_\_

14

Shape  $R$  is a rectangle.

A smaller rectangle is cut from  $R$  to form shape  $L$ .

Not drawn  
accurately



Which **one** of these statements is true?

Tick a box.

The perimeter of  $R$  is **longer than** the perimeter of  $L$

The perimeter of  $R$  is the **same as** the perimeter of  $L$

The perimeter of  $R$  is **shorter than** the perimeter of  $L$

It is **not** possible to tell which perimeter is longer

[1 mark]

Turn over for the next question

**15** Textbooks are stored on two shelves.

Each shelf is 0.72 metres long.

Each textbook is 30 millimetres wide.

Not drawn  
accurately



Can 50 textbooks be stored on these shelves?

You **must** show your working.

**[3 marks]**

---



---



---



---

Answer \_\_\_\_\_

**16** All tickets for a concert are the same price.

Amy and Dan pay £63 altogether for some tickets.

Amy pays £24.50 for 7 tickets.

How many tickets does Dan buy?

**[4 marks]**

---



---



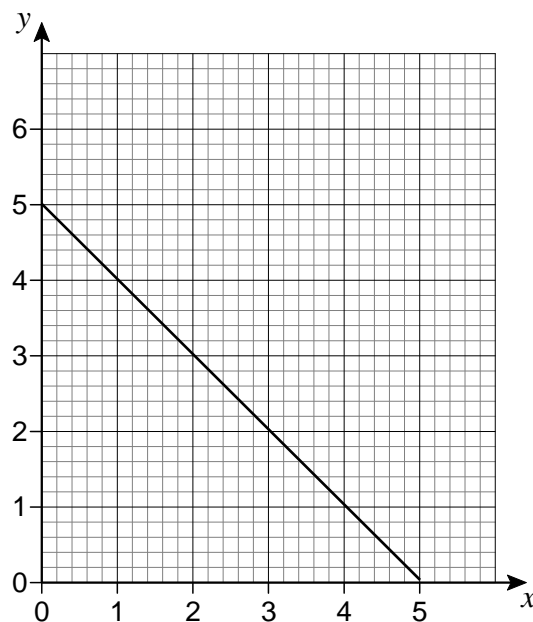
---



---

Answer \_\_\_\_\_

- 17 Here is the graph of  $y = 5 - x$  for values of  $x$  from 0 to 5



- 17 (a) On the same grid, draw the graph of  $y = x + 1$  for values of  $x$  from 0 to 5

[2 marks]

- 17 (b) Use the graphs to solve the simultaneous equations

$$y = 5 - x \quad \text{and} \quad y = x + 1$$

[1 mark]

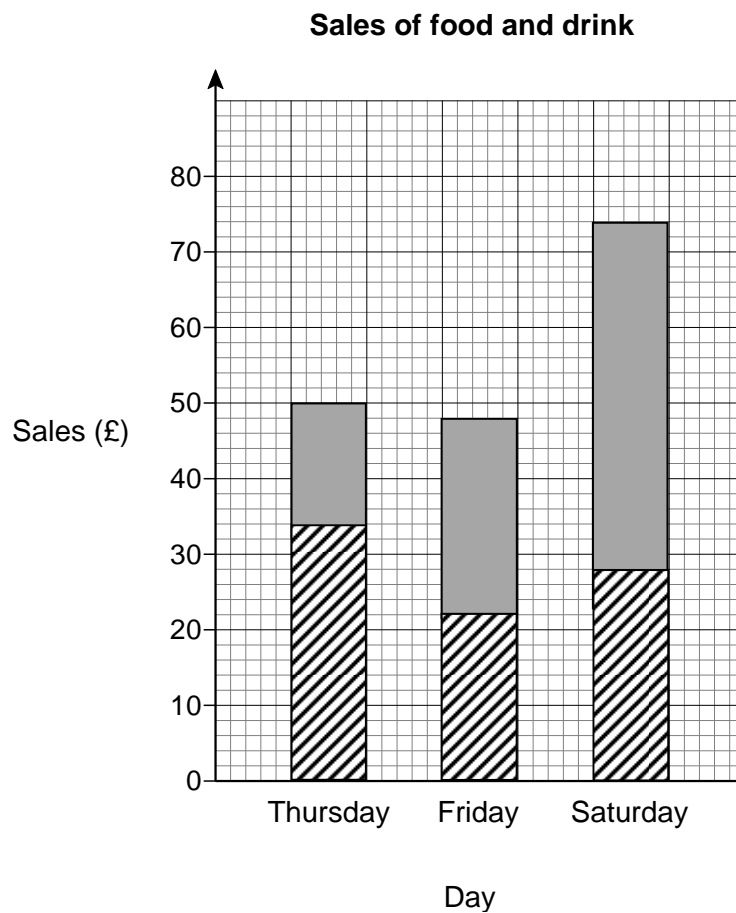
$$x = \underline{\hspace{4cm}}$$

$$y = \underline{\hspace{4cm}}$$

- 18** The table shows the sales of food and drink for three days at a market stall.

Day	Sales of food (£)	Sales of drink (£)
Thursday	34	16
Friday	22	48
Saturday	46	28

Hannah uses this information to draw a composite bar chart.



Write down **three** different mistakes that she has made.

[3 marks]

Mistake 1 \_\_\_\_\_

\_\_\_\_\_

Mistake 2 \_\_\_\_\_

\_\_\_\_\_

Mistake 3 \_\_\_\_\_

\_\_\_\_\_

**19** Sam wants to buy a camera for £345

He has already saved £96

Each week

his pay is £80

he saves 30% of this pay.

How many **more** weeks must he save?

[4 marks]

\_\_\_\_\_

\_\_\_\_\_

\_\_\_\_\_

\_\_\_\_\_

\_\_\_\_\_

Answer \_\_\_\_\_ weeks

**20 (a)**  $w$  and  $x$  are **whole** numbers.

$$w > 40$$

$$x < 30$$

Work out the **smallest** possible value of  $w - x$

[2 marks]

---

---

---

Answer \_\_\_\_\_

**20 (b)**  $y$  and  $z$  are **whole** numbers.

$$y < 60$$

$$z \leq 50$$

Work out the **largest** possible value of  $y + z$

[2 marks]

---

---

---

Answer \_\_\_\_\_



**21 (a)** Work out  $2.4 \times 0.002$

**[1 mark]**

---

Answer \_\_\_\_\_

**21 (b)** Write  $1.2 \times 10^{-5}$  as an ordinary number.

**[1 mark]**

---

Answer \_\_\_\_\_

**21 (c)** Write 2 500 000 in standard form.

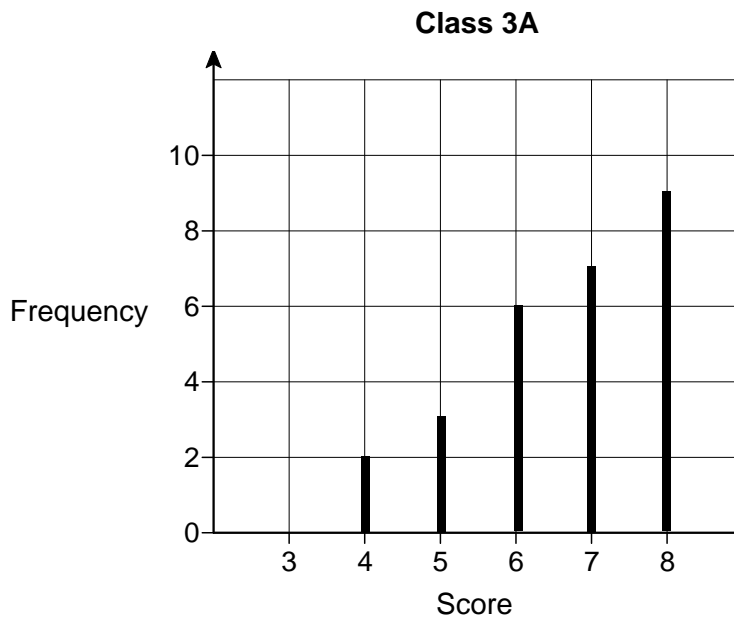
**[1 mark]**

---

Answer \_\_\_\_\_

**Turn over for the next question**

- 22 The diagram shows information about the scores of Class 3A in a spelling test.



- 22 (a) A student is chosen at random from Class 3A.

Work out the probability that the student's score was the **mode** for the class.

[3 marks]

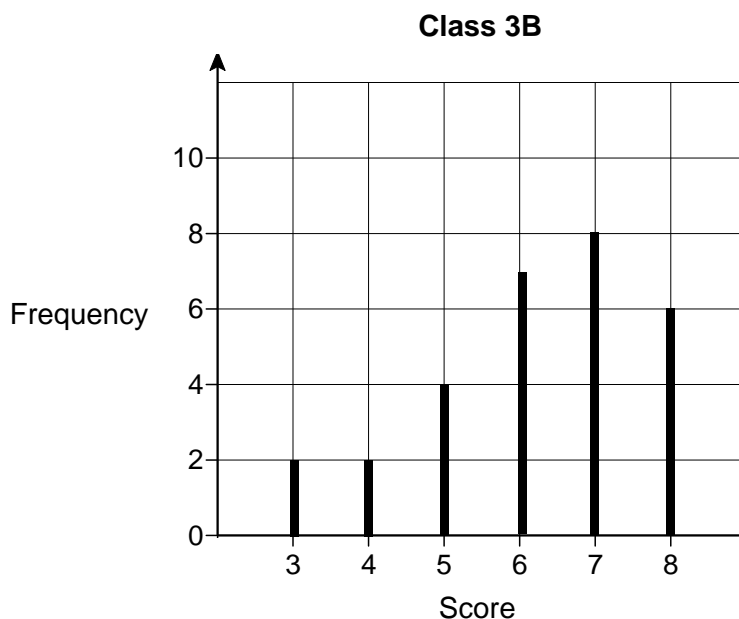
---

---

---

Answer \_\_\_\_\_

The diagram shows information about the scores of Class 3B in the same test.



**22 (b)** Show that Class 3A had more **consistent** scores than Class 3B.

Use the data from both diagrams.

**[2 marks]**

---



---



---

**22 (c)** Lucy is one of the 29 students in **Class 3B**.

Her score was the same as the **median** score for her class.

Work out her score.

**[2 marks]**

---



---

Answer \_\_\_\_\_

- 23 Kelly is trying to work out the two values of  $w$  for which  $3w - w^3 = 2$   
Her values are 1 and  $-1$

Are her values correct?

You **must** show your working.

[2 marks]

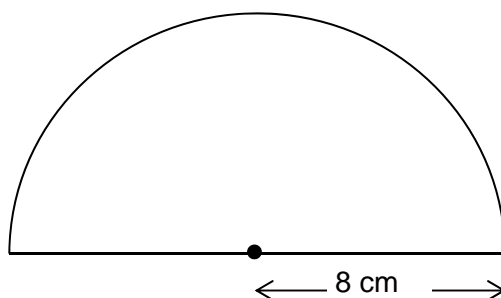
---

---

---

---

- 24 The diagram shows a semicircle of radius 8 cm



Not drawn accurately

Work out the area of the semicircle.

Give your answer in terms of  $\pi$ .

[2 marks]

---

---

---

Answer \_\_\_\_\_  $\text{cm}^2$

25 Work out  $2\frac{3}{4} \times 1\frac{5}{7}$

Give your answer as a mixed number in its simplest form.

[3 marks]

---

---

---

---

---

Answer \_\_\_\_\_

26 Solve  $5x - 2 > 3x + 11$

[2 marks]

---

---

---

---

Answer \_\_\_\_\_

**Turn over for the next question**

- 27** The  $n$ th term of a sequence is  $2n + 1$   
The  $n$ th term of a different sequence is  $3n - 1$

Work out the **three** numbers that are

in both sequences

and

between 20 and 40

**[3 marks]**

---

---

---

---

---

---

---

---

Answer \_\_\_\_\_, \_\_\_\_\_, \_\_\_\_\_

- 28** White paint costs £2.80 per litre.  
Blue paint costs £3.50 per litre.  
White paint and blue paint are mixed in the ratio 3 : 2

Work out the cost of 18 litres of the mixture.

**[4 marks]**

---

---

---

---

---

---

---

---

---

---

---

---

---

---

---

---

---

---

---

---

---

---

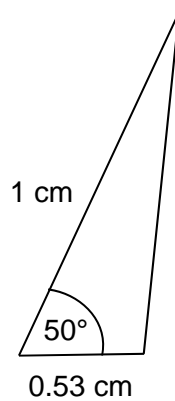
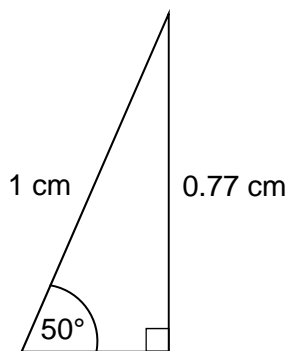
---

---

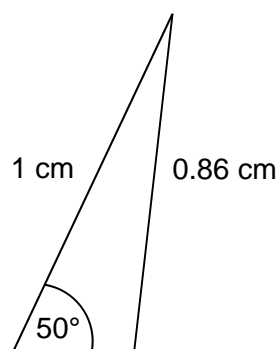
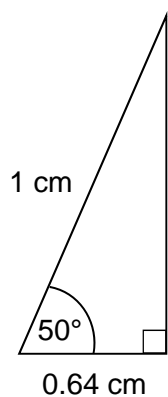
Answer £ \_\_\_\_\_

**Turn over for the next question**

29 Here are sketches of four triangles.



Not drawn accurately



In each triangle

the longest side is **exactly** 1 cm

the other length is given to 2 decimal places.

29 (a) Circle the value of  $\cos 50^\circ$  to 2 decimal places.

[1 mark]

0.77

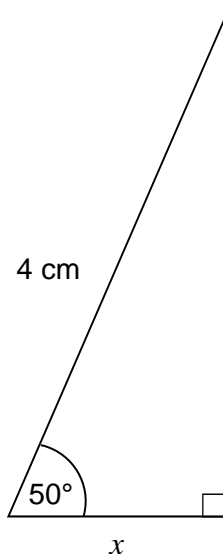
0.53

0.64

0.86



- 29 (b)** Work out the value of  $x$ .  
Give your answer to 1 decimal place.



Not drawn  
accurately

[2 marks]

---

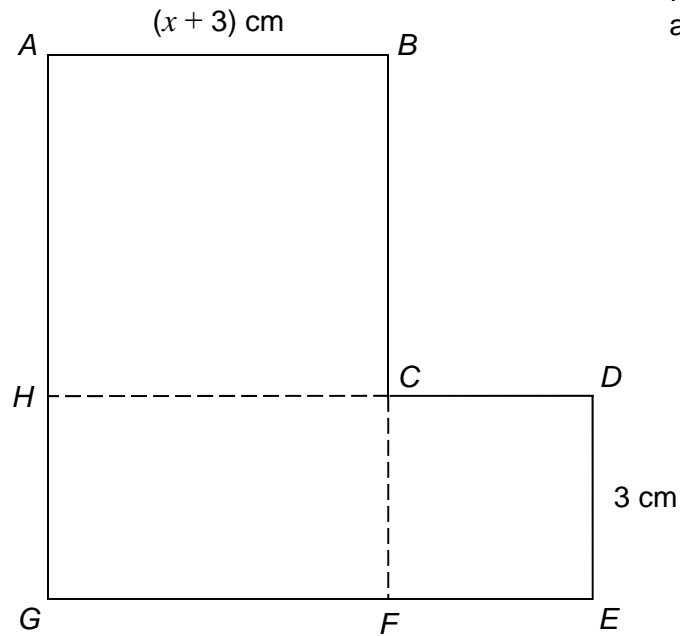
---

Answer \_\_\_\_\_ cm

**Turn over for the next question**

- 30**  $ABCH$  is a square.  
 $HCFG$  is a rectangle.  
 $CDEF$  is a square.

They are joined to make an L-shape.



Not drawn  
accurately

Show that the total area of the L-shape, in  $\text{cm}^2$ , is  $x^2 + 9x + 27$

**[4 marks]**

---



---



---



---



---



---



---



---



---



---

**END OF QUESTIONS**